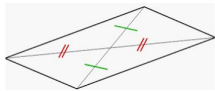



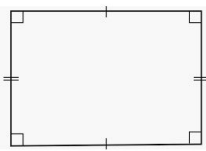



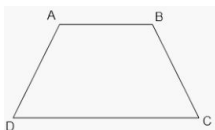



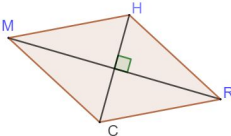
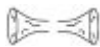


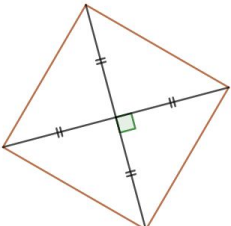



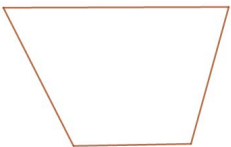



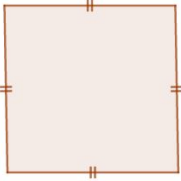





Quadrilatères - Monstre

Déterminer la réponse **la plus précise** en s'appuyant sur le codage de la figure pour justifier.
Compléter le portrait du personnage.

Partie à tracer	Figure géométrique	Réponse A	Réponse B	Réponse C
Yeux		 parallélogramme	 quadrilatère	 trapèze
Bouche		 losange	 rectangle	 carré
Nez	 (AB) // (DC)	 trapèze	 quadrilatère	 parallélogramme
Oreilles	 (MH) // (CR) (MC) // (HR)	 parallélogramme	 losange	 trapèze
Bras		 rectangle	 carré	 losange
Jambes		 trapèze	 losange	 quadrilatère

Bonus !		 carré	 losange
---------	---	--	--



Correction

